

Name : _____

Score : _____

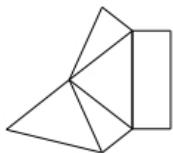
Teacher : _____

Date : _____

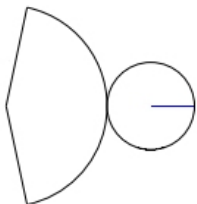
Nets Of Solids

Identify each solid given its net.

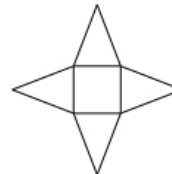
1)



2)

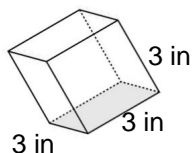


3)

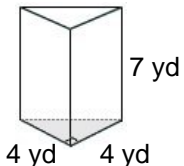


Sketch the net of each solid. Label the given measurements.

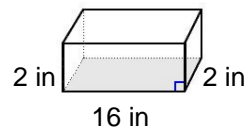
4)



5)

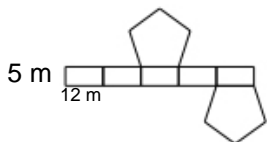


6)

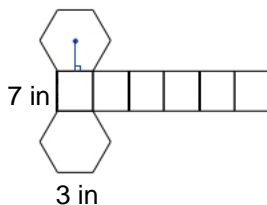


Sketch the solid that can be created from each net. Label the given measurements.

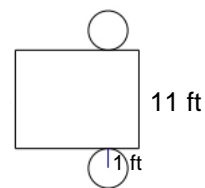
7)



8)



9)



Name : _____

Score : _____

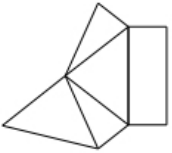
Teacher : _____

Date : _____

Nets Of Solids

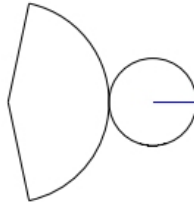
Identify each solid given its net.

1)



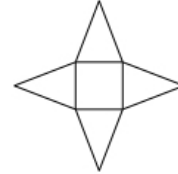
Rectangular Pyramid

2)



Cone

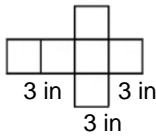
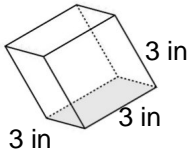
3)



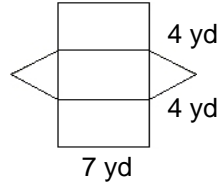
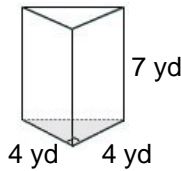
Square Pyramid

Sketch the net of each solid. Label the given measurements.

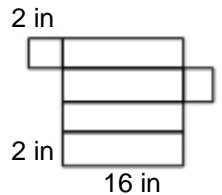
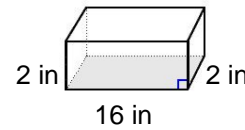
4)



5)

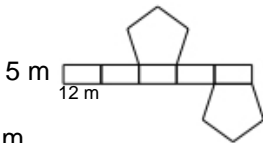
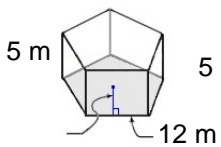


6)

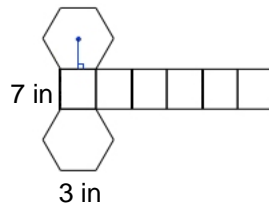
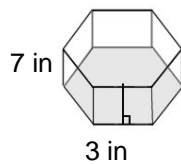


Sketch the solid that can be created from each net. Label the given measurements.

7)



8)



9)

