

Name : _____

Score : _____

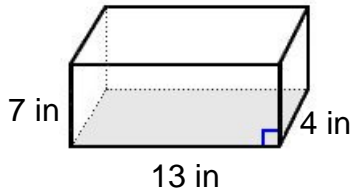
Teacher : _____

Date : _____

Volume of Prisms, Pyramids, Cylinders, and Cones

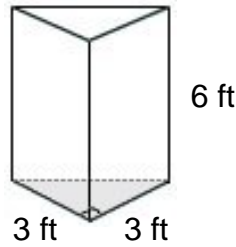
Find the volume of each figure. Round answers to the nearest hundredth, if necessary.

1)



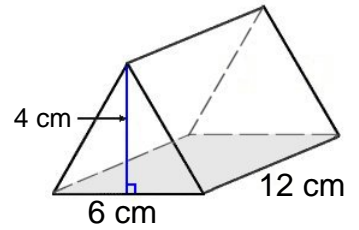
Volume: _____

2)



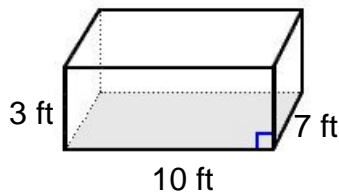
Volume: _____

3)



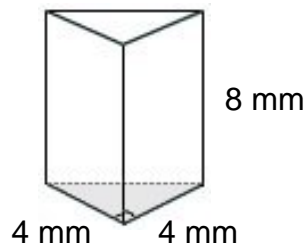
Volume: _____

4)



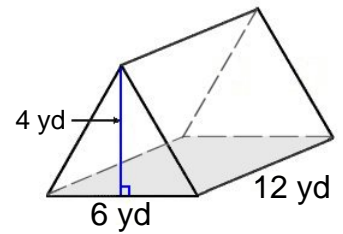
Volume: _____

5)



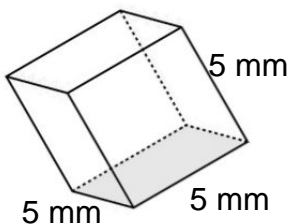
Volume: _____

6)



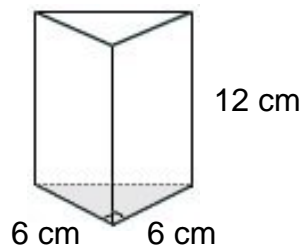
Volume: _____

7)



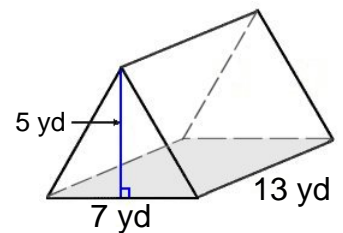
Volume: _____

8)



Volume: _____

9)



Volume: _____



Name : _____

Score : _____

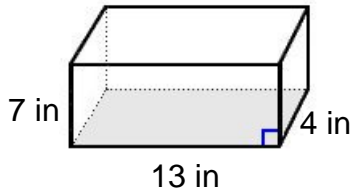
Teacher : _____

Date : _____

Volume of Prisms, Pyramids, Cylinders, and Cones

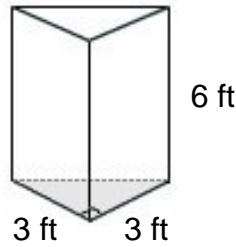
Find the volume of each figure. Round answers to the nearest hundredth, if necessary.

1)



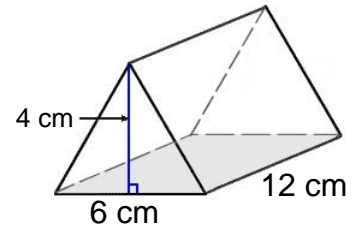
Volume: 364.00 in³

2)



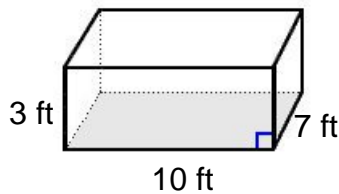
Volume: 27.00 ft³

3)



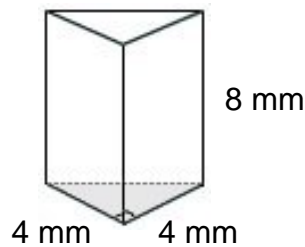
Volume: 144.00 cm³

4)



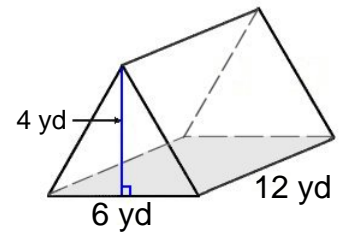
Volume: 210.00 ft³

5)



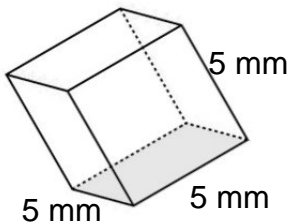
Volume: 64.00 mm³

6)



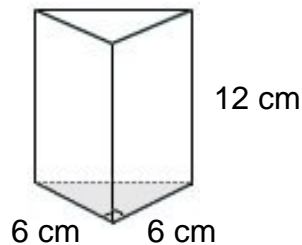
Volume: 144.00 yd³

7)



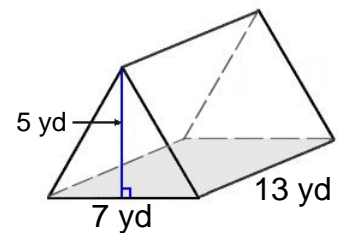
Volume: 125.00 mm³

8)



Volume: 216.00 cm³

9)



Volume: 227.50 yd³

