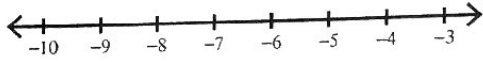
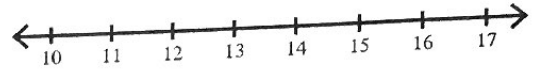


Solve each inequality and graph its solution.

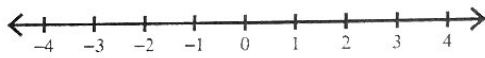
1) $-5x \geq 25$



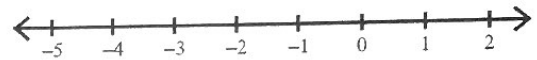
2) $\frac{n}{4} \leq 3$



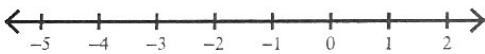
3) $2n > 2$



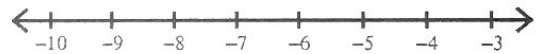
4) $\frac{n}{4} \leq -\frac{1}{4}$



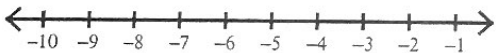
5) $-3x > 0$



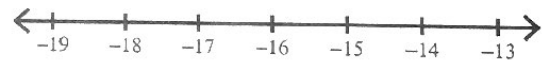
6) $\frac{m}{4} \leq -2$



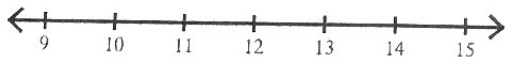
7) $-3n > 15$




8) $-3v > 45$



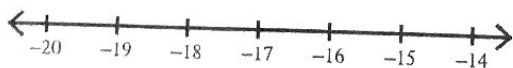
9) $8a < 96$



10) $10b \leq -10$



11) $\frac{b}{6} > -3$



12) $\frac{x}{5} \leq 3$

